

First Grade At-Home Learning Packets

(Snow Packets 17-26)

Name: _____

Things to Complete Each Day

1. Mountain Math Sheet
2. Mountain Language Sheet

Extra Options:

3. iReady (20 minutes of Math and 20 minutes of Reading) If your child needs a break for a day or a few days from iReady, take it.
4. Nature Exploration Science
5. Read books!!! (Epic or paper)

We love and miss you lots! Mrs. Gear & Mrs. Burke

Directions

Packet 17-26

Language and Math

- Complete 1 each day.
- Take a picture of your completed worksheet with your phone and send to your child's teacher.
- Answer the worksheet question according to the information that it wants.
- Each number on the worksheet corresponds to a number on the information sheet.
- Math has 15 items.
- Language has 20 items.

Mountain Language



NAME: _____

1. Write the letter of the beginning sound. Write the letter for the ending sound.

Use the word in a sentence.

flower house door open year park stop help class about table hand walk party rest stop love job

2. Fill in the missing blanks.

3. Choose the letter, number, or word that is the same as the first.

4. Choose the word that rhymes with the first picture.

5. Choose the picture that starts with the same sound as the first picture.

6. Write the vowel that goes in the blank.

Use this word in a sentence.

7. Write the vowel(s) that goes in the blank.

Use this word in a sentence.

8. Choose the correct blend.

Write the word.

9. Choose and circle. ch, sh, th or wh

Write the word.

10. How many syllables are in this word? _____

Use this word in a sentence.

11. List the noun.

List the verb.

is a common or proper noun?

Rewrite the sentence using the correct verb.

Yesterday

Today




Tomorrow

Rewrite the sentence using a preposition. (in, on, beside, under, over, down, up, across)

12. Draw a picture for each word that makes up the compound

Draw a picture of the compound word.

Use three adjectives to describe the compound word.



Three sets of horizontal lines for writing adjectives to describe the compound word.

13. Write the word that means the opposite of the first word

Use the word in a sentence.

Horizontal lines for writing the opposite word and a sentence.


14. Write the two words that make the contraction:

Use the word in a sentence

Horizontal lines for writing the two words and a sentence.

15. Draw a picture of this word.

Write the word in a sentence using the word and one of these conjunctions, (and, or)



Horizontal lines for writing the word and a sentence using conjunctions.

16. Write the name of the picture.

Use the word in a sentence.

17. Put the words in ABC order.

18. Proofread and write the sentence correctly.

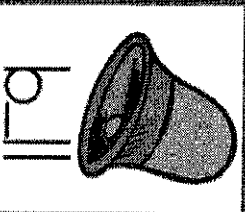
19. Which word does NOT belong? Why?

20. List as many items as you can that fit in the category.

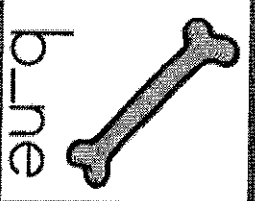
Write a sentence using at least three of the words, and use commas between each item.



1



6



7

The bear growled.

11

buttermilk

12

tidy: neat messy order

13

__w x __z

9

Which cookie do you want?

you'll


15

five

bel a see b be c do


10 bluebell

16



17


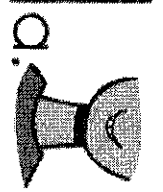
toe grin spoon



4

18

i hurt my nose




5

penny, nickel, dime, sky


Don't __am the door. sl pl fl

8


20 animal sounds



2 K L _ N O



9 Please _ut the door.





3 do | a. to b. be c. do

10 bubble


11 Juan whispered.

13 melt: freeze thaw dissolve





14 didn't

15 bear



17 new into let




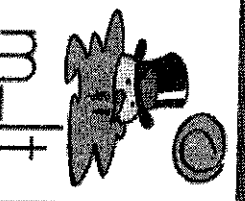

8 We went on a _ip. st br tr

20 vacation places

18 did you find your coat

19 nap, run, jump, skip

Day 19



11 A duck quacked.

12 baseball

13 full:
good
empty
rich

1 _m n _p

2 _is birthday cake is good.

14 I'd

15 sheep

3 6 | a. 4 b. b c. 6


10 said

16

17 jig



leg
know






18 the cow has a tail

19 dog, hen, cow, pig

8 The clown made me _lie. sm fr st

20 quiet things



11 Ty ate the cookie.

12 birdhouse

13 work:
labor
play
tail

2 V _ X Y _

9 A bee stung my _ umb.

14 can't


15 box

3 up | a. go b. my c. up



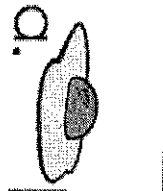
10 eyes



17 x-ray
vase
wife






18 jonah likes to read



19 north, eight, six, two

8 The king wore a _ own, or fl st

20 warm things



11 The leaves fell.

12 doorbell

13 clean:
neat
dirty
tidy

2 1 2 3 _ 5

9 My bike _eel was flat.


14 I'm

15 house

3 V | a. w b. v c. Y

16

17 peel
zoom
roll



18 sara put her doll away



19 five, green, red, orange

8 _and right there. Fr Pl St

20 square things



1

6 p_ggs

7 c_be

11 The rose grew.

13 out: over in past

2 STU_W

9 _y is the hen in the basket?

12 to enail

14 mustn't

15 three

3 Z | a. s b. z c. i

10 trouble

16

17 mend bend lend

4 a. b. c.


5 a. b. c.

18 i can ride my bike

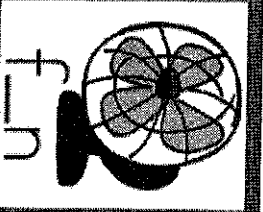
8 My ___ other is ten. gr fr br

19 cup, plate, bowl, rock


20 colors



1



6



7

11 The horse trotted.

11

12 bulldog

12

13 sharp:
crisp
tart
dull

13

2 6 7 _ q _

9 I'm afraid of _arks!





14 I've

15 baby

3 are | are | d. bare | c. see

10 about

16



17 zebra
horn
knee




18 i lost my tooth




19 Mars, Miami, Venus, Pluto

8 Two _us two is four. pl bl cl

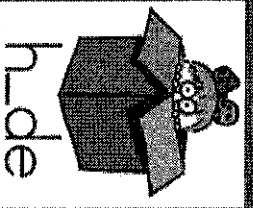
20 things that have wheels



1



6



7

11 The ground shook.

11

12 seaweed

12

13 late: tardy delayed early

13

2 2 3 4 _ 6

9 Let's _eer for our team.

14 what's

14

15 apple

15

3 q | a. b. b. q c. d

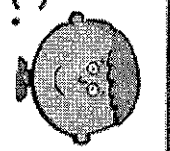

10 favorite

16



17



17 please little what



4

18 micah and yoko ate sandwiches

18




19 pot, hot, map, dot

19


8 | can _aw a picture. ar gr dr

20 things with teeth

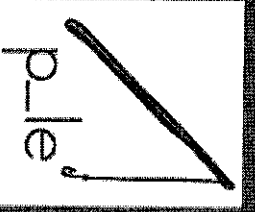
20



6



7



11

The dog wagged his tail.

13

open:
unlock
unseal
close

2
_ q r s _

9 The dog's _ain broke.

12

carpool

14



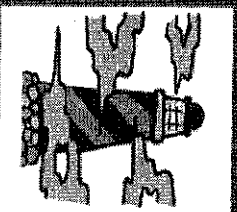
15

wagon

3 X | a. Y b. s c. x

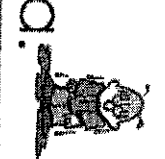
10 give

16



17

some
want
round



4
a. b. c.


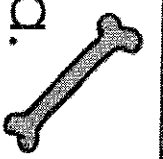
a.

b.

c.

18

my kitten likes warm milk



5
a. b. c.

a.

b.

c.

19

sock, hat, boot, shoe

8 The sky is _ue. fl sl bl

20

things that are yellow

1 © 1991-2020 Mountain Math Language LLC

Request Feature

Mountain Math



Name: _____

1. Write the number.

Write the word.

Hundreds	Tens	Ones
_____	_____	_____

_____ + | = _____

_____ + 10 = _____

_____ - | = _____

_____ - 10 = _____


List 5 numbers that come after this number.

List 5 numbers that come before this number

2. What numbers make the equation true?

_____ □ _____ □ _____

3. Fill in the numbers.



4.

Tens	Ones
_____	_____

Write the number in words.

_____ + 10 = _____

_____ - 10 = _____

5.

6. Write the problem and solve.

7. Write the problem and solve.

8. Show the problem and solve using the number line. Answer: _____



9. Write the correct answer. _____

11. Write the correct answer. _____

10. Use the numbers to make 4 equations.

_____	+	_____	=	_____
_____	+	_____	=	_____
_____	+	_____	=	_____
_____	+	_____	=	_____
_____	-	_____	=	_____
_____	-	_____	=	_____
_____	-	_____	=	_____
_____	-	_____	=	_____

12. What time is it?

13. Write the correct answer. _____

14. Name of Shape: _____

Circle
Flat or Solid

15. How many equal pieces? _____ One piece would be: $\frac{1}{2}$ or $\frac{1}{4}$

day 17



1 16

8

Sarah has ten more than Anne have? Anne has four more than Sarah. How many does Anne have?

12



2

$$20 + \square = 20$$

9


- Which is false?
 a. $8 = 5$
 b. $2 + 7 = 9$
 c. $10 = 5 + 5$

13

3



4



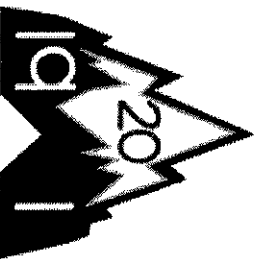
10

Favorite Winter Activity		
Ski	Sled	Ice Skate

Which is the least favorite activity?

5

$$73 \square 89$$



14




6

$$91 + 5$$

7


$$50 - 20$$

11



Which is the tallest?

15



Day 18



1 **115** **8**

John bought ten . He gave Matt four. How many did John have left?

2 $17 = \square + 10$

3 $98 \square 100 \square 101 \square$

4

5 $91 \square 93$

6 $33 + 10$ $70 - 30$

9 Which is false?
 a. $16 = 8 + 8$
 b. $6 + 5 = 10$
 c. $11 = 6 + 5$


How many long?

12

13 Favorite Drink
 Water
 Milk
 Soda
 Which is the favorite drink?

14

15



1 100

8


Kelly raised 11 kittens. She sold 5 of them. How many kittens did she have left?

12

2 $17 - \square = 12$

9


Which is true?
 a. $3 + 2 + 5 = 10$
 b. $13 - 3 = 9$
 c. $16 = 8 + 7$



3 $74 \square \square 76 \square \square 77 \square$

4

10



14

Which hand do you write with?

Right Hand	
Left Hand	


Do more children write with their right or left hand?

5 $19 \square \square 91$


6 $41 + 8$



How many long?



15





1 90

Kent has 4 nickels, 5 dimes, and 9 pennies in his pocket. How many coins does he have altogether?

2 $19 - 6 = \square$

Which is true?
 a. $12 + 3 = 13$
 b. $11 - 1 = 9$
 c. $6 + 2 = 2 + 6$


3 $81 \quad 82 \quad 83$

FAVORITE FLAVORS	
Vanilla	
Chocolate	
Strawberry	

4


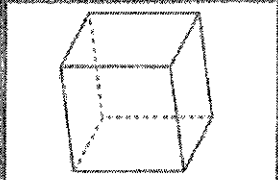
Which flavor is the favorite?


5 $30 \square 60$



6
$$\begin{array}{r} 37 \\ +62 \\ \hline \end{array}$$

Which is the shortest?
 a.
 b.
 c.

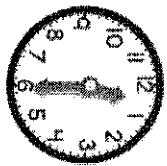




1 74

Mary had 6 in her closet. Her mother bought 3 more for her birthday. How many does she have now?

2 12




3 10 - □ = 5

4 9

Which is false?
 a. $7 + 7 = 12 + 2$
 b. $13 + 2 = 15$
 c. $6 + 3 = 10$

5 13

6 4




7 10

Favorite Place to Go	
Circus	
Rodeo	
Parade	


Which is the favorite place to go?

8 5

71 □ 70



9 14




10 6

41 + 19

7 80

How many long?

11 15





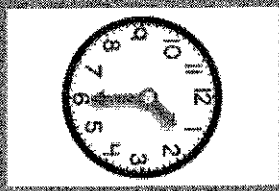
185

mimath.com is now full screen
 Exit Full Screen (Esc)
 Click here to play interactive

2 $14 - \square = 7$



9

- Which is true?
- a. $20 - 1 = 17$
 - b. $10 + 10 = 19 + 1$
 - c. $q - q = 1$




13

Students in Class	
Boys	Girls
Are there more boys or girls in the class?	





14


5 $82 \square q5$



6 $74 + 2$

7 $40 - 20$





1 79

Alexis collected little glass dishes. She broke 6 dishes and had 12 left. How many dishes did she have to start with?

8

2 $\square + 2 = 18$

9

Which is true?
 a. $4 = 4$
 b. $3 = 5 - 4$
 c. $2 + 6 = 7$

3 $69 \rightarrow 70 \rightarrow \square \rightarrow \square \rightarrow 73$


13

Favorite Vacation	
Beach	☆☆☆☆☆☆☆☆☆☆
Camping	☆☆☆☆☆☆☆☆☆☆
Amusement Park	☆☆☆☆☆☆☆☆☆☆

Which is the favorite vacation?


4

10




14

5 $18 \square 14$



6
$$\begin{array}{r} 76 \\ + 53 \\ \hline \end{array}$$

How many long?



7
$$\begin{array}{r} 50 \\ - 10 \\ \hline \end{array}$$

15



1 83

8

Will caught eight . Izzy caught five fewer than Will. How many did Izzy catch?

2 $\square - 3 = 10$

9

Which is false?
 a. $10 - 1 = 9$
 b. $9 + 1 = 10$
 c. $7 + 3 = 9$

3 qq 100 \square 102 \square


13

Favorite Games	
Games	
Cheekers	
Kickball	

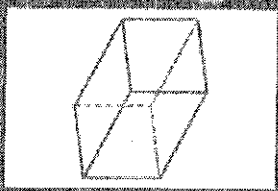
Which is the favorite game?

4

10




14



5 68 \square 28


6
$$\begin{array}{r} 80 \\ +16 \\ \hline \end{array}$$

7
$$\begin{array}{r} 60 \\ -30 \\ \hline \end{array}$$



Which is the tallest?

15



day 25



1 **64**

8

Nick gave Meg 4 altogether.
Meg has 12 did she
have to start with?

12

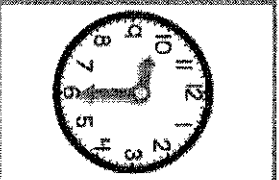
2

$$12 + 4 = \square$$

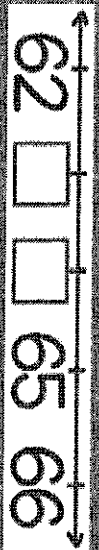
5

Which is true?
a. $16 - 2 = 8 + 8$
b. $19 = 18$
c. $14 - 14 = 0$


13



3



4




19

Favorite Sport	
Soccer	
Basketball	
Football	

Which is the favorite sport?

5

$$119 \square 120$$



14


6

$$\begin{array}{r} 75 \\ + 3 \\ \hline \end{array}$$


7

$$\begin{array}{r} 30 \\ - 20 \\ \hline \end{array}$$

How many long?



15



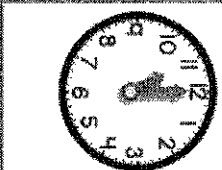


1 87

8

Two were on the flower. Some more flew to the flower, then there were nine . How many flew over to the first two?

12



2

$$11 - \square = 5$$

9

Which is false?
 a. $2 + 2 = 1 + 1 + 3$
 b. $12 = 15 - 3$
 c. $0 + 8 = 4 + 4$

3




13

Favorite Treat

Donut	Cookies	Ice Cream

Which is the favorite treat?

4





10

14

5

$$3q \square \square 3q$$




6

$$\begin{array}{r} 40 \\ + 19 \\ \hline \end{array}$$

7

$$\begin{array}{r} 50 \\ - 30 \\ \hline \end{array}$$

15




Which is the shortest?

First Grade Science

Nature Exploration Activities!



It is starting to be beautiful outside and if you are able to get outside, we encourage you to do so! We have included several things in this packet to help you explore the outside world! Please explore with the supervision of an adult.





Things included are:

1. A Nature Scavenger Hunt - Things to go on the search for outside!
2. Ziploc bags - To hold the treasures you find outside!
3. Nature Sketchbook Pages - To draw and record the things you see outside!
4. A glow in the dark creature!
5. A Ruler - To measure things what you find outside!
6. A Nature Explorer certificate - For all your hard work!



Nature Scavenger Hunt




Flower





Butterfly




Bird





Leaf





Bee




Web





Branch




Grass




Sun



Rock



Water



Feather



Nature Scavenger Hunt

Describe what you found



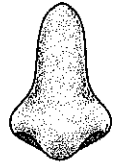
What does it feel like?





















What does it look like?



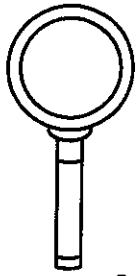
What does it sound like?



What does it smell like?



Name: _____




Search and Sketch:


Flower Edition

Search for each type of flower and draw it in the following boxes.

A colorful flower	A tall flower
A small flower	A hidden flower



Name: _____

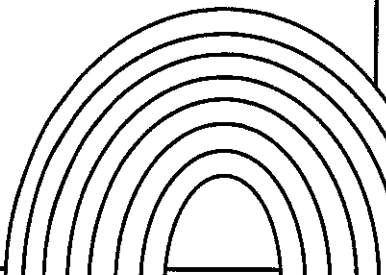


Search and Sketch:

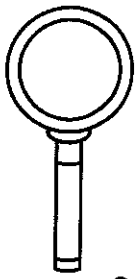
Color Edition

Go outside and search for these colors in nature. Draw what you find in the following boxes.

Purple	Green
Blue	Yellow

A simple line drawing of a rainbow with seven distinct bands, positioned in the bottom right corner of the grid.

Name: _____




Search and Sketch:

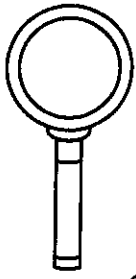
Bug Edition

Search for each type of bug and draw it in the following boxes.

A marching bug	A wiggling bug
A flying bug	A crawling bug



Name: _____




Search and Sketch:


Leaf Edition

Search for each type of leaf and draw it in the following boxes.

A green leaf	A yellow leaf
An orange leaf	A red leaf



Nature Explorers



Well done!

You have been an excellent
Nature Explorer this term!



Certificate presented to

Signed: Date:

Nature Explorers



Well done!

You have been an excellent
Nature Explorer this term!



Certificate presented to

Signed: Date: